

Read and write.

A) Six thousand ,five hundred and eighty nine.

In figures: 6589

B) 1546

In words: **one thousand, five hundred and forty six**


2. Find the perimeter and the area.

Perimeter:  $4+6+4+6=20$

6 cm

Area:  $4 \times 6 = 24$

4 cm



3. Fill in the blanks.

A. The measure of an obtuse angle is **between  $90^\circ$  and  $180^\circ$** .

B. The measure of an acute angle is **less than  $90^\circ$** .

C. The measure of a straight angle is  **$90^\circ$** .

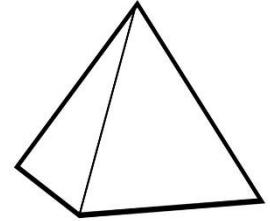
D. The measure of a reflex angle is **between  $180^\circ$  and  $360^\circ$** .

4. This is a sphere.

It has got 1 face and 0 vertices.

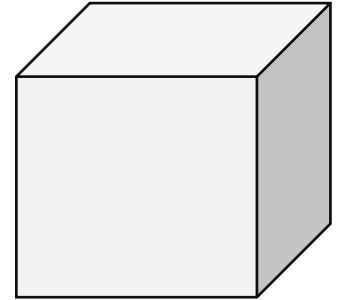


-This is a pyramid.



It has got 3 faces and 4 vertices.

-This is a cube.



It has got 6 faces and 8 vertices.

5. Read and circle.

A. The number 7432 is greater than 7321 / 7563.

B. 7400 is one hundred less than 7500 / 7300.

C. 5680 rounded to the nearest 100 is 5700 / 5600.

D. Number 25 is a multiple of 5 / 2 .

6. The pattern rule for the input is:

multiplied by two

The pattern rule for the output is:

add six

