



Level:

Starters 1



Alavi

Full Name:

Date:

Topic: Math (odd and even and counting by 2s)

1. Count the number of the circles and write "even" or "odd".

a) ● ● ●

How many?





















odd or even?

b) ● ● ● ● ● ●

c) ● ● ● ● ● ● ● ●

d) ● ● ● ● ● ● ● ●

2) How many apples? Count by 2s. Write the numbers.

 2	 	 	 8	 
 	 	 16	 	 
 22	 	 	 	 
 	 34	 	 	 

Comment:

