


11 Read Charlie's timetable.

**WRITING**

	Sunday	Monday	Tuesday	Wednesday	Thursday
<b>Morning</b>	9.00 have music lessons		9.30 study Science	7.30 study Art	
<b>Afternoon</b>			2.15 study Maths	2.00 study English	3.45 practise the piano
<b>Evening</b>				6.45 practise the violin	

**LOOK!**  
We can write times as numbers or words.

**TIP!**  
  
2.00 = two o'clock

12 Write the times.

- 1  = 9.00 = nine o'clock      2  = 2.15 = quarter past two
- 3  = 7.30 = Half past seven      4  = 6.45 = quarter to seven

**PUPIL'S BOOK**  
**Page 77**

13 Read and write Lily's timetable.

On Monday I study Maths at half past nine in the morning. On Tuesday I learn to draw at quarter past one in the afternoon.


On Wednesday I practise the violin at quarter to six in the evening. On Thursday I study Art at nine o'clock in the morning.

	Sunday	Monday	Tuesday	Wednesday	Thursday
<b>Morning</b>		<sup>1</sup> <u>9.30</u> <u>study Maths</u>			<sup>4</sup> <u>9.00</u> <u>study art</u>
<b>Afternoon</b>			<sup>2</sup> <u>1.15</u> <u>learn to draw</u>		
<b>Evening</b>				<sup>3</sup> <u>5.45</u> <u>practise the violin</u>	

# Activity Book - Page 72 (Answers)

Number the pictures in order.

5 4 1 2 3



Read and choose the correct answers.

1. When did Professor Bloom learn to make machines?  
 On Friday.  
 When he was six.
2. What time does he get up?  
 He always gets up at 7.30.  
 He always gets up at 7.00.
3. What time is it?  
 It's 7.30.  
 It's 7.00.
4. What does Professor Bloom need?  
 He needs one more thing for the machine.  
 He needs a different machine.





# Activity Book

## Pages 72-77



11 Read the story again.  
How often does the Professor make new machines?

12 Number the pictures in order.



13 Read and tick (✓).

1 When did Professor Bloom learn to make machines?

When he was six.  On Friday.

2 What time does he get up?

He always gets up at 7.00.

He always gets up at 7.30.

3 What time is it?

It's 7.00.  It's 7.30.




4 What does Professor Bloom need?

He needs one more thing for the machine.

He needs a different machine.



### 14 Match.



6.00

3.30

7.15

12.45

quarter to one

six o'clock

half past three

quarter past seven

### 15 Write about your week.

On \_\_\_\_\_ I \_\_\_\_\_ at \_\_\_\_\_ in the \_\_\_\_\_.

On \_\_\_\_\_ I \_\_\_\_\_ at \_\_\_\_\_ in the \_\_\_\_\_.

On \_\_\_\_\_ I \_\_\_\_\_ at \_\_\_\_\_ in the \_\_\_\_\_.

On \_\_\_\_\_ I \_\_\_\_\_ at \_\_\_\_\_ in the \_\_\_\_\_.



### 16 Read Activity 15 again and write your timetable.


	Sunday	Monday	Tuesday	Wednesday	Thursday
Morning					
Afternoon					
Evening					

# PHONICS

17 Read the words. Circle the pictures.

crab frog string train

br cr dr fr  
gr pr str tr



18 Find and circle the words.

brother fruit strawberries drum trousers present grandad crocodile


19 Look at Activity 18 again and write. Then say.


<b>br</b> brother	<b>cr</b>	<b>dr</b>	<b>fr</b>
<b>gr</b>	<b>pr</b>	<b>str</b>	<b>tr</b>
_____	_____	_____	_____


20 Read aloud.


The boy likes his toy train. He can pull it with the string. He's got a green frog, a brown owl and a red crab.

21 Unscramble and write. Then match.

1  I usually kawl  
walk to school.

2  I always go to school  
by nirta \_\_\_\_\_.







3  I often go to school  
by ubs \_\_\_\_\_.

4  I always go to school  
by ebki \_\_\_\_\_.



22 How do you and your friends go to school?  
Complete the table. Then write.

always ✓✓✓ usually ✓✓ often ✓✓ never ✗

	By car 	By bus 	By bike 	By boat 	By train 	Walk 
1 Me						
2 _____						
3 _____						

1 I \_\_\_\_\_  
2 \_\_\_\_\_  
3 \_\_\_\_\_

23 Write.

afternoon bus evening morning shops  
~~there are~~ toys walk weekend



In a lot of cities in the UK <sup>1</sup> *there are* shopping centres. Shopping centres often open every day of the week. They usually open at 9.00 in the <sup>2</sup> \_\_\_\_\_ and they close at 8.00 in the <sup>3</sup> \_\_\_\_\_. They are always open at the <sup>4</sup> \_\_\_\_\_. You can usually buy food, drink, <sup>5</sup> \_\_\_\_\_, games and more. There are often restaurants and there are always a lot of <sup>6</sup> \_\_\_\_\_. Shopping centres are usually in the town centre. People often drive or go by <sup>7</sup> \_\_\_\_\_ to get there.

24 Read Activity 23 again and answer.


- 1 When do shopping centres open?  
*They open every day of the week.*
- 2 What time do they open?  
 \_\_\_\_\_
- 3 What time do they close?  
 \_\_\_\_\_
- 4 How often are they open at the weekend?  
 \_\_\_\_\_
- 5 How do people get to shopping centres?  
 \_\_\_\_\_

25 Look and write questions and answers.



- When does she practise the violin ?  
She practises the violin on Friday.
- When did \_\_\_\_\_ ?  
When she was \_\_\_\_\_.
- \_\_\_\_\_
- \_\_\_\_\_

26 Look and write.



27 Look at Julie's timetable. Write questions and answers.

9.00	
11.15	
2.30	
6.45	

What time does she study Maths?  
She studies Maths at 9.00 in the morning.

- 
- 
- 
-