

1 _____ 6 _____

nine

seven

2 _____ 7 _____

ten

five

3 _____ 8 _____

one

two

4 _____ 9 _____

three

four

5 _____ 10 _____

eight

six



11 _____ 16 _____

fifteen

seventeen

12 _____ 17 _____

eighteen

thirteen

13 _____ 18 _____

fourteen

twenty

14 _____ 19 _____

eleven

twelve

15 _____ 20 _____

sixteen

nineteen

Comparing Numbers 0-10

NAME :

Greater Than Less Than Equal To Worksheets

10

9

3

2

8

10

6

9

6

6

9

10

7

7

8

5




Less than



equal to



greater than



What is the difference between the numbers ?

Ex: The difference between 1 and 3 is 2.

A	B
1	3

1

A	B
34	60

4

A	B
16	20

2

A	B
10	11

5


A	B
23	30

3

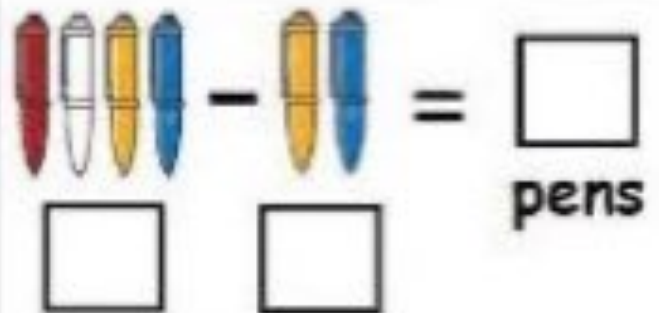
A	B
3	6

6

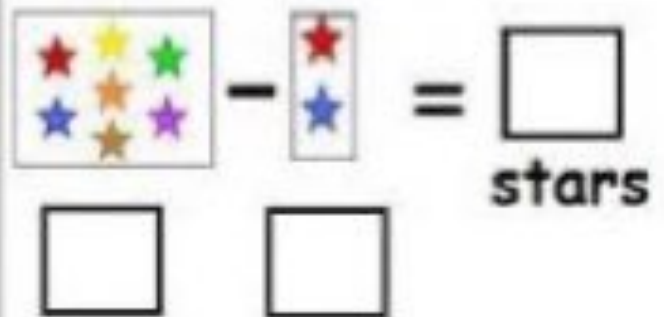
1) Jack has 6 apples. He gives 3 apples to Bella. How many apples are left with Jack?



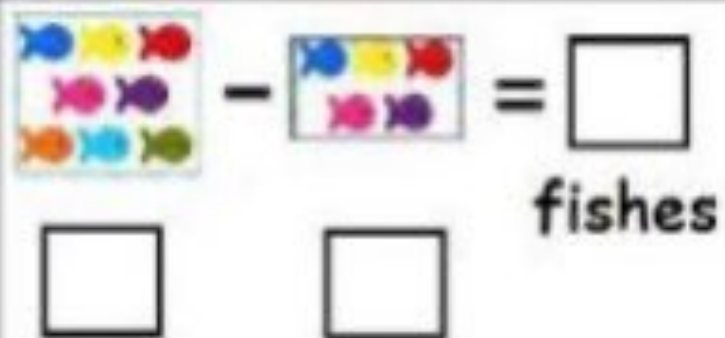
2) There are 4 pens in a box. Tia takes out 2 pens from the box. How many pens are left in the box?



3) Sam has 7 stars. He gives 2 stars to Ben. How many stars are left with Sam?



4) There are 8 fishes in a pond. 5 fishes swim away. How many fishes are left in the pond?



Word Problems

- 1) Tom has 3 yellow pencils and 2 red pencils. How many pencils does he have?



+

=

- 2) There are 4 roses and 2 sunflowers in my garden. How many flowers are there in all?



+

=

- 3) 5 boys were playing in the playground. 3 girls also join in. How many kids are there?



+

=

Pentagon

Rectangle


Hexagon

Triangle




It is a _____.

It has _____ sides and _____
Corners.



It is a _____.

It has _____ sides and _____
Corners.



It is a _____.

It has _____ sides and _____
Corners.



It is a _____.

It has _____ sides and _____
Corners.