

## “Science”

### 1) Read and match.

- |   |                        |
|---|------------------------|
| 1. It can be bent.                        | A. waterproof          |
| 2. It soaks up liquid.                    | B. fat and sugar       |
| 3. It keeps your bones and teeth healthy. | C. rigid               |
| 4. Do not eat too much of this.           | D. flexible            |
| 5. Water cannot get through it.           | E. absorbent           |
| 6. It keeps its shape.                    | F. fruit and vegetable |


### 2) Read and write True or False.

1. Tree is smooth.
2. Roots support the plant.
3. A coin is rigid.
4. A lion eats other animals.

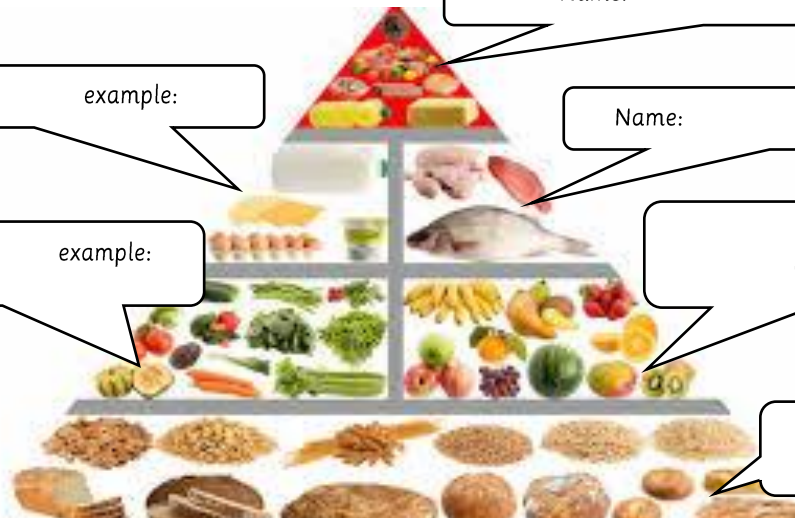
### 3) Read and circle.

1. A cat weights about 4 Kilograms/20 Kilograms.
2. We have similar / different fingerprints.

### 4) Look at the pictures and decide if the person has to Push or Pull.



### 5) Look at the food pyramid and label each group and write an example for each group.



Name: \_\_\_\_\_ example: \_\_\_\_\_

Name: \_\_\_\_\_ example: \_\_\_\_\_

Name: \_\_\_\_\_ example: \_\_\_\_\_

Name: \_\_\_\_\_ example: \_\_\_\_\_

Name: \_\_\_\_\_ example: \_\_\_\_\_

## “Math”

### 1. Read and answer.







- A. Twenty-four divided by eight equals .....
- B. Five times seven equals .....
- C. Double six is ..... and half of six is .....

### 2. Read and solve the problem.

- \* There are nine apples in a bag. I buy three bags. How many apples have I got?
- \* I need 45 apples. How many bags should I buy?

### 3. Use the tally chart to answer the questions. It shows student's favourite fruit.

- \* How many students like blueberry?
- \* How many students like banana?
- \* How many students like orange and strawberry?

### 4. I'm an odd number 360 and 370. I'm less than 368 and greater than 362. I have 5 ones. What number am I?