

Teacher's Name:

Date:

Student's Name:

Grade:

1. Write:

- A. Seven plus six is
- B. seventeen minus seven is
- C. Ten minus three is
- D. Five plus ten is



2. Read and circle.

- A. 23 is less than / is greater than 52.
- B. 61 is greater than / is equal to 45.
- C. 30 is less than / is equivalent to 30.

3. Look at the numbers and write the difference.


- A. The difference between
____ and ____ is ____ .



- B. The difference between
____ and ____ is ____ .



4. Solve each problem.

A. There are six .

Two more  come.

How many in all?

_____ plus _____ equals _____.

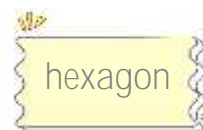
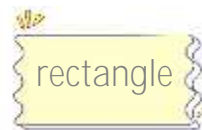
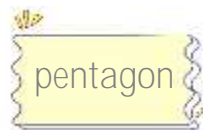
B. There are nine .


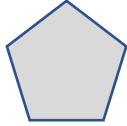
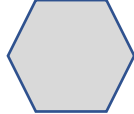
Two  run away.

How many are left?

_____ minus _____ equals _____.

5. Complete the sentences using the given words.



	This is a _____ . It has ___ sides and ___ corners.
	This is a _____ . It has ___ sides and ___ corners.
	This is a _____ . It has ___ sides and ___ corners.

6. Draw a ring around the 2nd chicken.

