










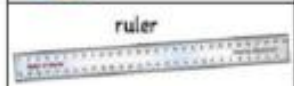






















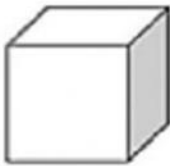
Q1. Find the name of the magnet based on their shapes.

horseshoe	wand	disc-shaped	ring	bar
				
1. _____	2. _____	3. _____	4. _____	

Q2. Choose which is magnetic and which is not magnetic.

Object	Magnetic	Non-Magnetic
 paper clip	 <input checked="" type="checkbox"/>	 <input type="checkbox"/>
 building brick	 <input type="checkbox"/>	 <input checked="" type="checkbox"/>
 ruler	 <input checked="" type="checkbox"/>	 <input type="checkbox"/>
 coin	 <input checked="" type="checkbox"/>	 <input type="checkbox"/>
 nail	 <input checked="" type="checkbox"/>	 <input type="checkbox"/>
 scissors	 <input checked="" type="checkbox"/>	 <input type="checkbox"/>
 pencil	 <input type="checkbox"/>	 <input checked="" type="checkbox"/>
 paper fasteners	 <input checked="" type="checkbox"/>	 <input type="checkbox"/>
 book	 <input type="checkbox"/>	 <input checked="" type="checkbox"/>

Plastic ruler is non-magnetic  
Steel ruler is magnetic



I am a \_\_\_\_\_,

**cube**

I have \_\_\_\_\_ equal sides.

**four**



I am a \_\_\_\_\_,

**cylinder**

I have \_\_\_\_\_ flat faces and  
one \_\_\_\_\_ face.

**two**

**curved**



I am a \_\_\_\_\_,

**cuboid**

I have \_\_\_\_\_ sides.

**four**



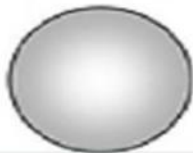
I am a \_\_\_\_\_,

**cone**

I have \_\_\_\_\_ flat face and  
one \_\_\_\_\_ face .

**one**

**curved**



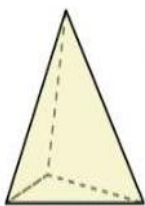
I am a \_\_\_\_\_,

**sphere**

I am a \_\_\_\_\_ shape.

**round**

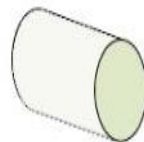
1)



2)



3)



5)



- A. Rectangular Prism
- B. Triangular Pyramid
- C. Cube
- D. Cylinder

- A. Rectangular Pyramid
- B. Cube
- C. Triangular Pyramid
- D. Sphere

- A. Rectangular Pyramid
- B. Triangular Prism
- C. Cone
- D. Cylinder

- A. Rectangular Prism
- B. Triangular Pyramid
- C. Cone
- D. Cylinder

Alavi

Level:

Date:

No:

Drag and drop the correct picture that can roll.

