


① از عبارت مربوط به شکل رو به رو را بنویسید



$$6 \times 4 = (4 \times 4) + (2 \times 4) =$$

② پاسخ دهید؟

$$A: (9 \times 3) + (9 \times 1) = 33$$

$$B: (3 \times 4) - (2 \times 4) = 6$$

$$C: (7 + 0) + (9 - 7) = 10$$

$$D: (3 \div 1) + (9 \times 7) = 67$$

③ عبارت ضرب هر کدام را بنویسید.

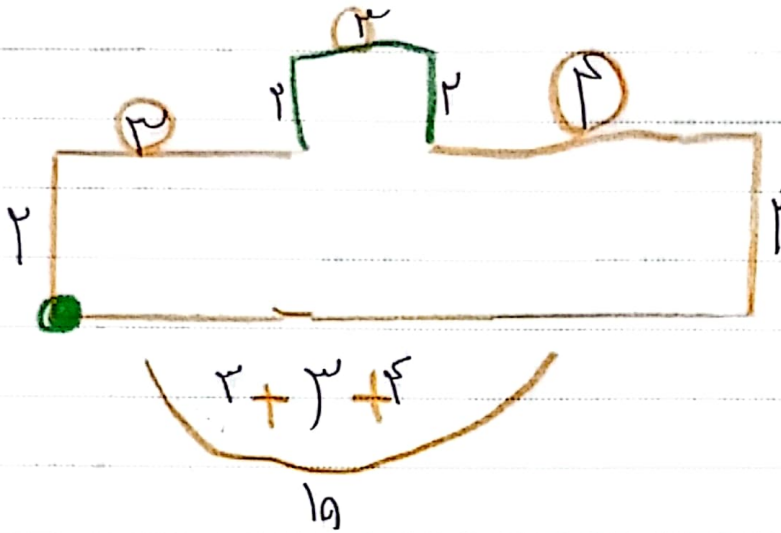
$$6 \times 3 = 18$$

$$4 \times 7 = 28$$

④

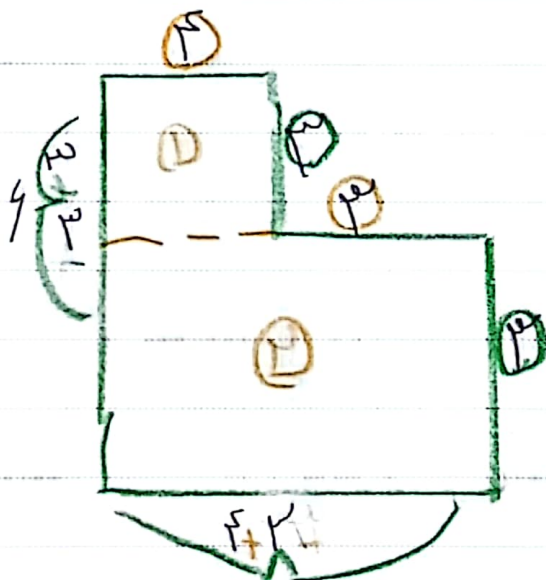
$$9 \times 11 = 3 \times 9 = 11$$

(3)



جواب (3)

$$2 + 3 + 2 + 1 = 9 \text{ cm}$$



(4)

$$S_1 = 1 \times 2 = 2 \text{ cm}$$

$$S_2 = 3 \times 4 = 12 \text{ cm}$$

$$S_3 = 1 + 2 = 3 \text{ cm}$$