
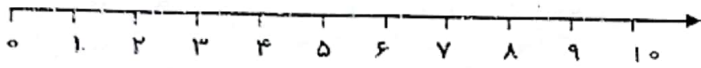


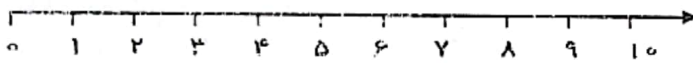
$$4 + 5 = \dots$$



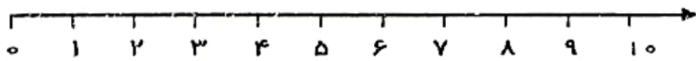
$$3 + 2 + 1 = \dots$$



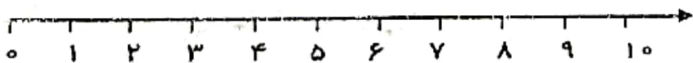
$$4 + 2 = \dots$$



$$3 + 5 = \dots$$



$$4 + 8 = \dots$$



$$4 + 3 + 2 = \dots$$