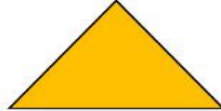



Who am I?

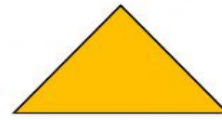
I have 4 sides. 2 sides are long, and 2 sides are short. What shape am I?




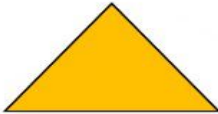
I am round. I do not have any corners. What shape am I?



I have 4 sides. All 4 sides are equal. What shape am I?



I have 3 sides and 3 corners. What shape am I?



LIVEWORKSHEETS



What Shape Am I?



Read each sentence. Check the shape that matches the description.

1. I have 3 sides and 3 angles.



rhombus



triangle



rectangle

2. I have no angles.



circle



hexagon



trapezoid

3. I have 6 sides 6 angles.



pentagon



triangle



hexagon

4. I have 4 equal sides.



rectangle



trapezoid



square