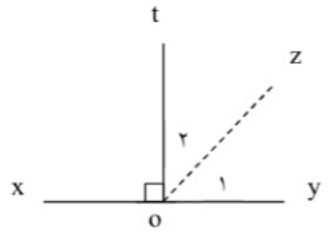
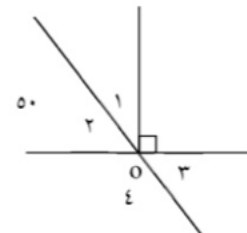
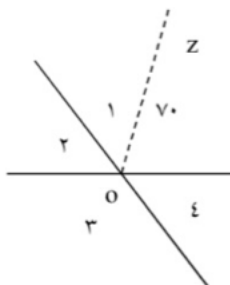
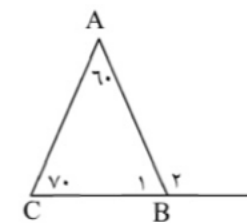
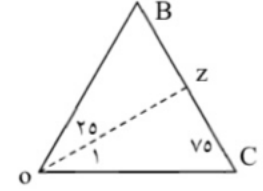
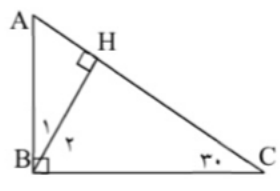
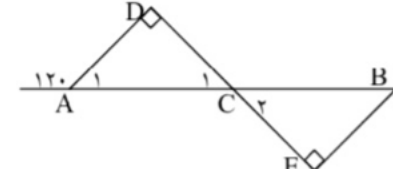


۴- هر یک از اندازه‌های خواسته شده را به دست آورید. در هر شکل OZ نیمساز است.

| | |
|--|---|
|  <p>$\hat{\alpha}_1 = \square$ و $\hat{\alpha}_2 = \square$</p> |  <p>$\hat{\alpha}_1 = \square$, $\hat{\alpha}_2 = \square$, $\hat{\alpha}_3 = \square$</p> |
|  <p>$\hat{\alpha}_1 = \square$, $\hat{\alpha}_2 = \square$, $\hat{\alpha}_3 = \square$</p> |  <p>$\hat{\beta}_1 = \square$, $\hat{\beta}_2 = \square$</p> |
|  <p>$\hat{\beta} = \square$, $\hat{\alpha}_1 = \square$</p> |  <p>$\hat{\alpha} = \square$, $\hat{\beta}_1 = \square$, $\hat{\beta}_2 = \square$</p> |

۴۷ _____ هندسه و استدلال _____

| | |
|---|--|
|  | <p>$\hat{\alpha}_1 = \square$ و $\hat{\alpha}_2 = \square$ $\hat{\alpha}_3 = \square$ و $\hat{\beta} = \square$</p> |
|---|--|